




1. Vypočítaj príklady a zisti, ktorá včelička zaletela najďalej .




19	-	14	=	19	-		-		=	



18	-	16	=	18	-		-		=	





15	-	13	=		-		-		=	



14	-	11	=		-		-		=	

18	-	14	=		-		-		=	





2. Pomôž Vilkovi a Maji vypočítať príklady.

17 - 16 =

18 - 15 =

16 - 11 =

12 - 10 =

13 - 13 =

20 - 18 =

16 - 14 =

11 - 10 =

15 - 12 =

19 - 13 =

18 - 11 =

17 - 15 =

